



**Bal Bharati**  
PUBLIC SCHOOL  
NSTPS-NTPC, Nabinagar  
CBSE Affiliation No. 330932



# SUMMER HOLIDAY



# HOME WORK

I AM \_\_\_\_\_

I STUDY IN \_\_\_\_\_

MY ROLL NO IS \_\_\_\_\_





**HOLIDAY HOMEWORK**

**SESSION: 2023-24**

**Class II**

**Subject – English**

**Name** \_\_\_\_\_ **Roll** \_\_\_\_\_

1. Prepare a beautiful greeting card on the occasion of “Mother’s Day”. Write 5 lines about your mother.

2. Prepare a model on opposites words.

**3. Comprehension passage.**

At 9 o'clock every morning Nandita’s father goes to work. He works in a big bank. Nandita’s mother also works every day. She prepares breakfast lunch and other meals for all at home. She stitches clothes for Nandita and her brothers and sisters. Nandita goes to school daily. She has to study her lessons do her homework and prepare for her examinations. Nandita is a wise little girl.

Choose the correct sentence from passage

- a. Nandita’s father work in a field.
- B. Nandita’s father works in an office.
- C. Nandita’s father works in a school.
- e. Nandita’s mother prepares only dinner.
- F. Nandita’s mother prepares only lunch and dinner.

Nandita’s mother prepares breakfast lunch and other meals.

H. Nandita has to prepare for studies only.

I. Nandita has to prepare for study, do homework and prepare for the Examination.

J. Nandita has to study and do homework.

**4. Circle the correct spelling**

- |               |             |              |
|---------------|-------------|--------------|
| 1) Girffe     | 2) Giraffe  | 3) Girrafee  |
| 2) Wonderfull | 2) Wondrful | 3) Wonderful |
| 3) Smile      | 2) Smmil    | 3) Smile     |
| 4) Poppy      | 2) Puppy    | 3) Ppuppy    |
| 5) Starr      | 2) Stare    | 3) Stare     |

## 5. Vocabulary level :-

1) Young one of the dog.

a) kitten

b) puppy

c) duckling

2) She teaches me in school

A) mother

b) teacher

c) clerk

3) We wear this to see and read clearly.

a) glasses

b) book

c) goggles.

4) This animal is very tall.

a) zebra

b) deer

c) giraffe

5) We play here in the school.

a) house

b) library

c) play ground

## 6. Choose the correct word from the bracket to fill in the gap--:

1. Fish \_\_\_\_\_ swim in the water. ( can / cannot)

2. We should \_\_\_\_\_ the animals. (hate/ love)

3. March month \_\_\_\_\_ thirty one days.( has/ have)

4. I \_\_\_\_\_ going to school by bus. ( is / am)

5. A \_\_\_\_\_ of puppies were sleeping with their mother. ( pack/ litter)

## 7. Watch the movie finding nemo and write down the positive outcome from it.

---

---

---

---

## 9. Record a video with your parents creating a scene from your book.

## 10. Complete the spelling.

1) q \_\_\_\_\_ ic \_\_\_\_\_ ly

2) \_\_\_\_\_ tr \_\_\_\_\_ ng

3) ho \_\_\_\_\_ t \_\_\_\_\_ r

4) c \_\_\_\_\_ a \_\_\_\_\_

5) r \_\_\_\_\_ u \_\_\_\_\_ d

विषय- हिंदी  
कक्षा – द्वितीय

नाम \_\_\_\_\_

1. कागज के गते से डाकपेटी बनाएँ ।
2. चार्ट पेपर पर मौखिक भाषा तथा लिखित भाषा के किन्ही पाँच उदाहरणों के चित्र चिपकाते हुए उनके नाम लिखें।
3. कागज के फूलों पर सभी वर्णों को चिपकाते हुए वर्ण गुलदस्ता बनाएँ ।
4. किन्ही दस पशु – पक्षियों की बोलियाँ निकालते हुए उनके नाम बोलें एवं एक विडियो बनाएँ ।
5. अ से लेकर श्र तक वर्ण लिखें –

स्वर \_\_\_\_\_

\_\_\_\_\_

अयोगवाह \_\_\_\_\_

\_\_\_\_\_

व्यंजन \_\_\_\_\_

\_\_\_\_\_

\_\_\_\_\_

\_\_\_\_\_

\_\_\_\_\_

\_\_\_\_\_

\_\_\_\_\_

संयुक्त व्यंजन \_\_\_\_\_

अन्य वर्ण \_\_\_\_\_

6. स्वरों की मात्रा लिखें –

अ - \_\_\_\_\_

ऊ - \_\_\_\_\_

आ - \_\_\_\_\_

ऋ - \_\_\_\_\_

इ - \_\_\_\_\_

ए - \_\_\_\_\_

ई - \_\_\_\_\_

ऐ - \_\_\_\_\_

उ - \_\_\_\_\_

ओ - \_\_\_\_\_

औ - \_\_\_\_\_

7. निम्नलिखित शब्दों से वाक्य बनाएँ –

सूरज - \_\_\_\_\_

मोती - \_\_\_\_\_

सुबह - \_\_\_\_\_

मेहनत - \_\_\_\_\_

8. तुम्हारे बहुत से अच्छे दोस्त होंगे | अपने सबसे अच्छे दोस्त के बारे में पाँच वाक्य लिखें –

---

---

---

---

---

---

---

---

---

---

9. हमें अपने माता – पिता का हमेशा सम्मान एवं सहायता करना चाहिए | आप अपने माता – पिता की सहायता किन किन कार्यों में करते हैं? पाँच वाक्यों में लिखें |

---

---

---

---


---

---

---

---

This image shows a blank sheet of white paper with horizontal ruling lines. The lines are evenly spaced and run across the width of the page. There are no margins, text, or other markings on the paper.



# ओक का पेड़ और ऊँची घास

अपठित गद्यांश पढ़कर नीचे लिखे प्रश्नों को हल करें।

एक समय की बात है। एक ओक का पेड़ हमेशा घास के पौधों से कहा करता था कि वह उन घास के पौधों से कहीं अधिक मजबूत है। उसने घास के पौधों से कहा "मैं तूफान में भी सीधा खड़ा रहता हूँ। मैं हर बार हवा के झोंके के डर से अपना सिर नहीं झुकाता। लेकिन तुम घास के पौधों वाकई कितने कमजोर होते हो।"

उसी रात तूफान आया और शक्तिशाली ओक का पेड़ उखड़ गया।

घास के पौधों ने कहा 'हे भगवान !' अच्छा हुआ आपने हमें ऐसा बनाया, क्योंकि हम झुकते हैं लेकिन हम टूटते नहीं हैं।"

सीख - "कभी भी घमंड नहीं करना चाहिए। "



- इस कहानी का क्या नाम है ?

-----

- कौन तूफान से नहीं डरता ?

-----


- इस कहानी से हमें क्या सीख मिलती है ?

-----



# शेर और चूहा

अपठित गद्यांश पढ़कर नीचे लिखे प्रश्नों को हल करें।



एक समय की बात है। एक जंगल में एक शेर और एक चूहा रहता था। एक दिन शेर सो रहा था। चूहा सोते हुए शेर के ऊपर खेलने लगा। शेर की नींद खुल गई और उसने गुस्से से चूहे को पकड़ा और मार डालना चाहा। किन्तु चूहे ने माफ़ी मांग कर खुद को बचा लिया।

कुछ समय बाद शिकारियों ने उस शेर को जाल में पकड़ लिया। शेर बहुत घबरा गया। चूहे ने शेर को इस हालत में देखा, उसने झट से अपने दाँतों से जाल को काट दिया और शेर की जान बचाई।

**सीख - अच्छा करो, अच्छा मिलेगा।**

- जंगल में कौन - कौन रहता था ?

-----

- चूहे ने शेर को कैसे बचाया ?

-----

- हमें इस कहानी से क्या सीख मिलती है ?

-----



**Subject – Mathematics**  
**Class – II**

Name \_\_\_\_\_ Roll \_\_\_\_\_

Q1. Write the number name of 468 =

\_\_\_\_\_

Q2. What is the place value of 8 in 82 ? \_\_\_\_\_

Q3. An example of Sphere is \_\_\_\_\_

Q4. Draw a close and open figure:

--	--

Q5. Write in numerals: Seven hundred seventy-nine = \_\_\_\_\_

Q6. Complete the series: 108, 109, \_\_\_\_\_, \_\_\_\_\_, \_\_\_\_\_

Q7. Arrange in ascending order: 781, 871, 495, 758

\_\_\_\_\_

Q8. Write a number that has 2 at hundreds place, 7 at tens place and 0 at ones place

\_\_\_\_\_

Q9.  $200 + 40 + 6 =$  \_\_\_\_\_

Q10. A cuboid has \_\_\_\_\_ plane surface. (8/12/6/0)

**Project work**

Make a wall hanging or bandhanwar using different shapes. Decorate it beautifully. (PG - 19)

Collect pictures of similar shapes to the shapes given below and paste them. (PG - 16)

Name \_\_\_\_\_ Roll \_\_\_\_\_

1. “ If you want to make the Earth fantastic, say no to plastic” -  
Make a page bag from old newspaper and write a meaningful message of your choice on it to spread awareness to save the environment.
2. “ from a tiny seed , an informative observation may grow “
  - a) Put some soil in two jars, sow some seeds ( chickpea, kidney beans) in them.
  - b) Keep the jars in sunlight and water them regularly.
  - c) When the plants grow from the seeds then close one jar and observe foe 2-3 days-  
What do you observe? Share your experience in the class after vacation.
3. Draw a human body in the chart paper and label the body parts.( in a innovative way)
4. Write six lines about ‘Myself’.

---

---

---

---

---

---

---

---

---

---

---

---

5. Write your favorites –  
Food - \_\_\_\_\_

Season - \_\_\_\_\_

Colour - \_\_\_\_\_

Subject - \_\_\_\_\_

Game - \_\_\_\_\_

6. Name the sense organ that helps to do the following things –

See the beautiful flowers in the  
garden \_\_\_\_\_.

Taste an ice cream \_\_\_\_\_.

Listen to the music \_\_\_\_\_.

Smell delicious food \_\_\_\_\_.

Know if a thing is hot or cold \_\_\_\_\_.

7. Write three things you do using your legs.

---

---

---

8. Write three things you do using your hands and shoulders.

---

---

---

9. What is external and internal organs ? give the examples.

---

---

---

---

---

---

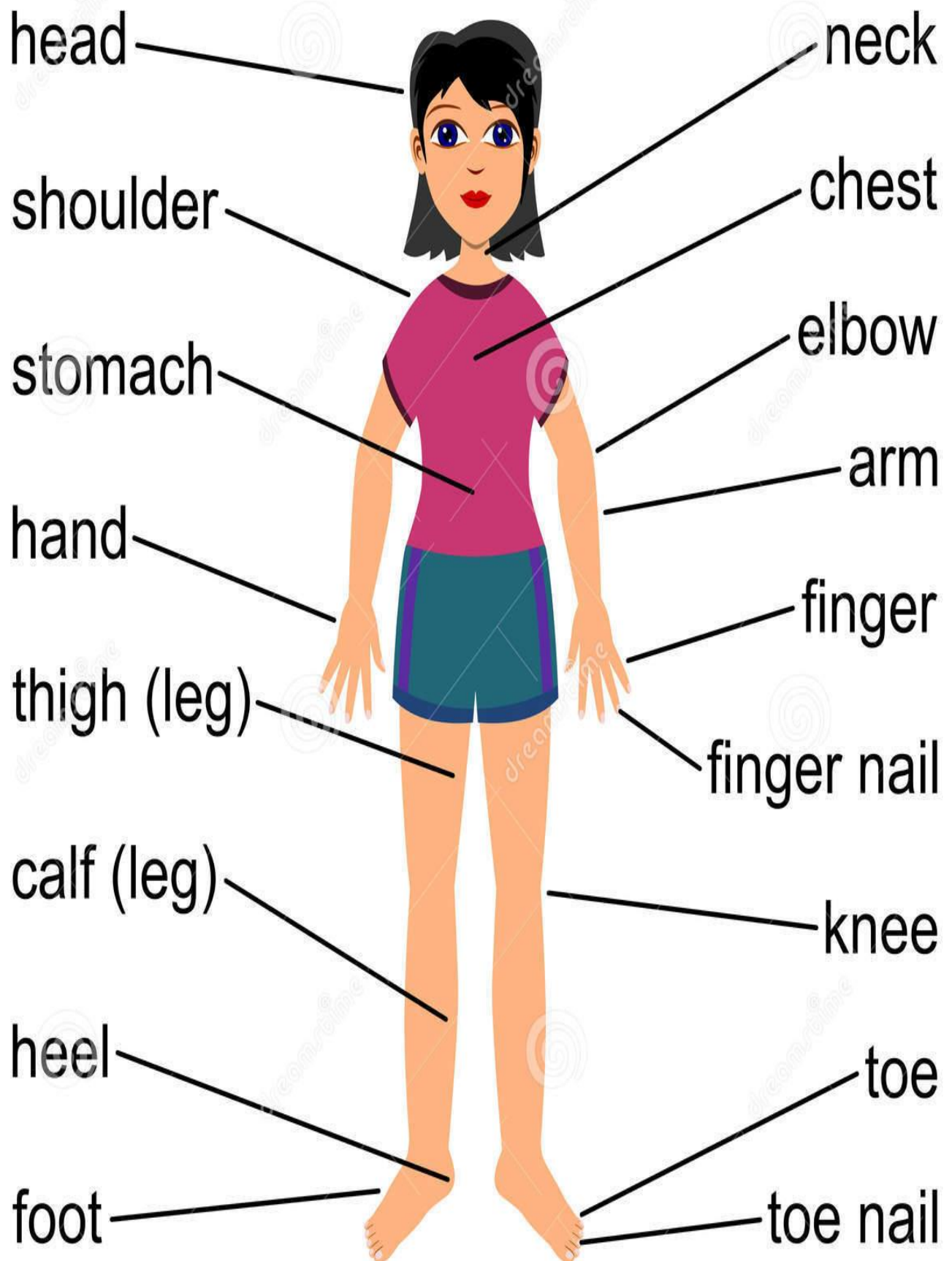
---

---

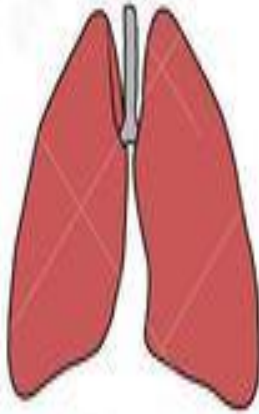
---

---

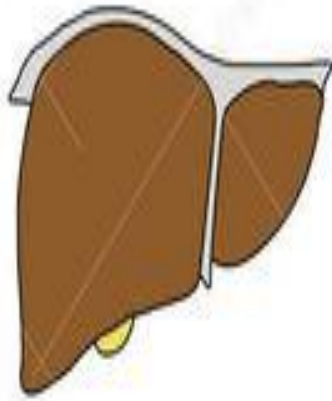
# PARTS OF THE BODY



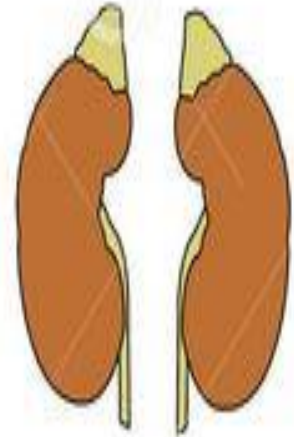
# INTERNAL ORGANS



lungs



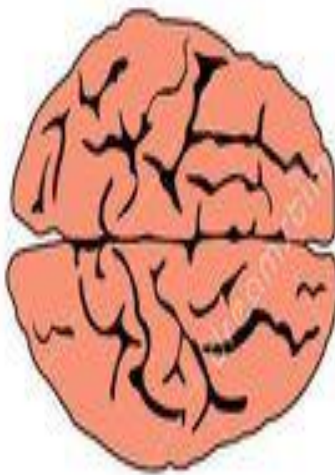
liver



kidneys



stomach



brain



heart

**Subject – Computer**  
**Class – II**

Name \_\_\_\_\_ Roll \_\_\_\_\_

**Q1. Multiple choice Questions.**

1. Which of the following is true about computer?  
(i) Computer can run                      (ii) Computer can sing  
(iii) Computer can eat                      (iv) We can type on a computer
2. The full form of PC is  
(i) Process Computer                      (ii) Private Computer  
(iii) Personal Computer                      (iv) Perfect Computer
3. Which of the following cannot be done on a computer?  
(i) Watch movie              (ii) Wash clothes              (iii) Draw              (iv) type letter
4. Which of the following is a computer device?  
(i) Bicycle                      (ii) AC                      (iii) Fan                      (iv) Mouse
5. Which of the following devices is used to enter text or numbers into a computer?  
(i) Mouse                      (ii) Keyboard                      (iii) Printer                      (iv) Monitor

**Q2. Write (T) for true and (F) for false.**

1. Computers can be found in schools and universities. ☐
2. Computers are not used in hospitals to keep records of patients. ☐
3. Computers are used by scientists to do research and experiments. ☐
4. A printer is a device used to produce hard copies of digital files. ☐
5. A scanner is a device used to take photographs. ☐

**Q3. Fill in the blanks**

payments,	movies,	cursor,	movement,	sound
-----------	---------	---------	-----------	-------

1. A mouse is used to move the \_\_\_\_\_ on the computer screen.
2. A joystick is used to control \_\_\_\_\_ in computer games.
3. A microphone is used to record \_\_\_\_\_ into a computer.
4. Computers are used in movie theaters to show \_\_\_\_\_.
5. Computers are used in restaurants to take orders and process \_\_\_\_\_.

**Q4. Unscramble to find the name of the part of a computer.**

ITROMNO = \_\_\_\_\_

AOKRYEDB = \_\_\_\_\_

ETIRPRN = \_\_\_\_\_

UMSEO = \_\_\_\_\_





**Q5. Match the following.**

1. Aeroplan
2. Bicycle
3. Torch
4. Microware
5. Computer

- a. runs on human power
- b. a smart machine
- c. it is an electronic machine
- d. runs on fuel
- e. runs on battery

**Q6. Identify which is the input, output and storage device and write it in the given box.**



**Q7. Look at the pictures and write what are they doing on a computer?**





---



---

**Activity:** - i. Draw main parts of a computer in A4 sheet, also write their names and their function.

ii. Collect pictures of different types of computers Desktop, Laptop, Smartphone,

Tablet etc. and paste it on a coloured A4 sheet. Write heading at the top of sheet

as “Types of Computer” and put a nice border along the edges.


### **Subject –General Knowledge**

Make a chart on any one of the states of India showing its special features like special festival, food, culture, important cities/places, history etc.

### **Subject – Art & Craft**

#### **JIGSAW PUZZLE**

A colourful jigsaw puzzle of 4 or 6 pieces using a cardboard of A-4 size sheet on one of the following theme animals/ birds/ fruits/vegetables / transport. (Refer to the images given below )



Note: All students should revise their