



Bal Bharati
PUBLIC SCHOOL
Nabinagar, Aurangabad
CBSE Aff. No. - 330932



HOLIDAY homework



Name: _____

Roll No: _____

Class: _____



SUMMER VACATION HOLIDAY HOMEWORK

Class IV

Subject:- English

1. Today a reader, tomorrow a leader - read any one story book of your choice.
2. Make a list of summer activities on A4 size sheet and paste the pictures related to it.
3. Prepare any one article using waste material at home.
4. Watch the movie Mary Poppins and write down the outcomes in an A4 size paper.
5. Write down your experience of visiting a new place during summer vacations.
6. **Read the following passage and answer these questions. (A4 size paper)**

There are four seasons in England. They are winter, spring, summer and autumn. Winter begins in December and ends in February. It is a cold, wet season. Spring which follows winter is cold. In summer days are warm and cold. After summer comes autumn. It is a dry and windy season. Trees shed leaves in this season.

Answer the following questions:

- A. How many seasons are there in England ?
- B. Which season comes after summer?
- c. When does winter begin?
- d. Pick out two nouns from the passage
- e. Fill in the blank.

Autumn is _____ and _____ season

7. Match the adjectives with the correct nouns:

- | | |
|----------|-------|
| A. Green | river |
| b. Long | grass |

ii. Change the gender and write the sentence again.

- a. A boy is running.
- b. iii. Fill in the blank with correct form of the word given in the brackets:
- c. a. I drink a of milk daily. (glass/glasses)
- d. b. There are twelve in my diary. (page/pages)

iii. Write the correct opposite of the underlined word.

- a. Roots grow above the soil.

iv. Write the correct form of degree of comparison:

A. Happy _____

8. Rewrite the sentence correctly:

A. Were there plump two sparrows little flying rooms in the.

ii. Punctuate the sentence correctly using capital letters and full stop.

a. It was a good idea

lii. Match the words with their correct meanings:

A. Lovely to start

B. Begin pretty


iv. Make sentences using the given word.

A. Grow- _____

v. Circle the correct spellings:

a. Problem problem prroble

9. Write a short story on the given picture.



10. Write a letter to your friend telling him/her about your preparations for 'Father's day'.

Subject:- Hindi

1. "जी होता चिड़िया बन जाऊँ" कविता की कोई एक पंक्ति लिखकर उसका अर्थ अपने शब्दों में लिखिए ।
2. पाठ-1 के किन्हीं पाँच शब्दों को लिखकर उनका वर्ण-विच्छेद कीजिए ।
3. ईदगाह पाठ की तरह यदि आपको कभी किसी की मदद करने का मौका मिले तो आप किसकी मदद करेंगे ? 50 शब्दों में लिखिए ।
4. पाठ-2 ईदगाह के किन्हीं 5 नए शब्दों से वाक्य बनाइए ।
5. यदि आपको चिड़िया बनने का मौका मिलता तो आप क्या-क्या करते ? 50 शब्दों में लिखिए ।
6. देवनागरी अंको में 9 से ५० तक संख्या लिखिए ।
7. संज्ञा की परिभाषा लिखकर उसके प्रकारों को लिखिए ।
8. पाठ-2 ईदगाह के लेखक मुंशी प्रेमचन्द के विषय में 50 शब्दों में लिखिए ।

9. आपको हिंदी का कौन सा कवि पसंद है ? उसके बारे में 50 शब्दों में लिखकर उनकी किसी कविता को लिखिए ।
10. वर्तमान समय में जिन-जिन देशों में हिंदी बोली जाती है , उन देशों के नाम लिखकर बताइए कि उन देशों में हिंदी का प्रचार कैसे हुआ ?
11. प्रतिदिन हिंदी समाचार पत्रों को पढ़कर उनमें से उन समाचारों को ढूँढकर रेखांकित कीजिए जिनमें दूसरी भाषा के शब्दों का प्रयोग किया गया हो और उन समाचारों में से दश अच्छे समाचारों को एक चार्ट पेपर पर चिपकाइए ।

Subject:- Maths

Q1. Solve the following:

$$\begin{array}{r}
 89563 \\
 + 4\boxed{}5\boxed{}9 \\
 \hline
 \boxed{}\boxed{}3\boxed{}22
 \end{array}$$

$$\begin{array}{r}
 \boxed{}87,989 \\
 - 2\boxed{}\boxed{},902 \\
 \hline
 232,087
 \end{array}$$

Q2. Put the sign (>/</=): $785 + 591$ $783 + 845$

Q3. Write the expanded form of the given numbers.

3,77,611 _____

Q4. Write the predecessor and successor of the following numbers:

_____, 58,43,999, _____

Q5. Form a number with

6 at lakh place

5 at ten lakh place

3 at ones place

2 at hundred place

0 at thousand place

2 at tens place

4 at ten thousand place

--	--	--	--	--	--

Q6. Fill in the following blanks:

3 lakh = _____ ten thousands

Q7. Fill the following table for the underlined digit

Number	Place value	Face value	Place	Period
2,15,432				

Q8. Circle the smallest number and underline the largest number

2345684, 235462, 2364521, 123546, 231456, 123456

Q9. Shivansh wants to open a shop. He buy goods for Rs.1,59,845. He also spent Rs. 78,459 on rapairing the shop and Rs. 23,458 on decoration. How much money he spent altogather to open the shop?

Q10. In a large stadium 1,00,589 people gather to watch an event. Out of them 52,485 are male and rest are female. How many female came to watch the event?

Project

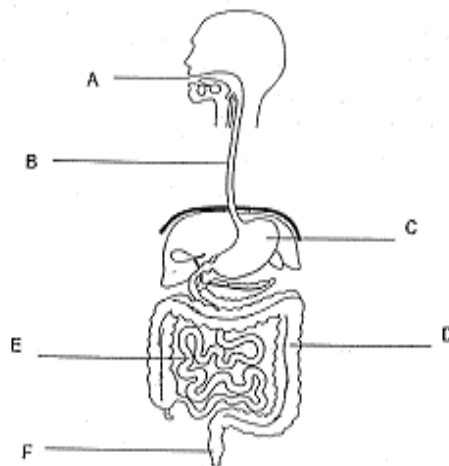
Mathematical Rangoli

Make at least two different Rangoli patterns using different geometrical shapes/ figures on and A3 paper. Colour and decorate beautifully. Put the heading "Mathematical Rangoli"

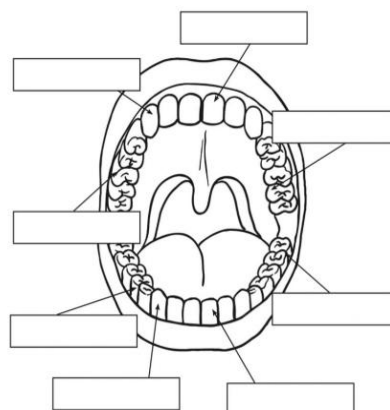
Subject:- Science

Q1. Write 4 tips to keep your teeth healthy.

Q2. Write the names of parts of digestive system:



Q3. Write the names of kinds of teeth



Q4. Write the names of two body building and energy giving food:

Q5. Explain the full process of digestion from mouth to anus in brief.

Fill in the blanks:

Q6. There are _____ molar teeth in each jaw.

Q7. A baby will have _____ teeth when he/she is two and half years old.

Q8. _____ is a method of preservation of food.

Q9. _____ of our body weight is water.

Q10. A tooth has three parts: _____, _____ and _____.

ACTIVITY

1. Watch the movie – “The Lorax”
2. Take a chart paper and make a poster on any one of the topic from your book. Prepare a presentation related to your poster. (you may draw or paste related pictures)

Subject:- SST

1. Make a paper mache model of the great Himalayan ranges showing the rivers, valleys and passes among them.

2. Collect pictures of people and other information of different states and make a project (written) on it in an a4 size paper.

3. Respect food Watch this video - <https://www.youtube.com/watch?v=wig98vecfxe&t=19s>

4. Find about any one traditional cuisine of a state of India. Select one state from each direction. Write what all spices are used in it and collect the information to present in a tabular form along with relevant pictures on an a4 sheet paper.

5. Paste spices, local, name, popular, name any medicinal plant in a chart paper.

6. Masks- reflection of culture and religion

Masks form an important aspect of many of the folk dances, folk theatre; traditional pageants, ceremonies, rituals, festivals and fairs. So, let's do a fun activity to know more about this in a video recorded by you.

7. Choose any one state and make a mask, which people use for dance, theatre, ritual etc.

8. Attempt a quiz on India, visit rsgr.in/bss401.

9. Do research on mt. Everest as it is the highest peak in the world. Find out the names of the highest mountain peaks in the other six countries.

10. Revise the chapters taught in the class.

Subject:- Computer

Q1. Answer the following questions in computer copy.

- A) What is a computer?
- B) What is the primary function of the system unit in a computer?
- C) What is the difference between a desktop and a laptop computer?
- D) What is a server computer used for?
- E) What is a supercomputer and what is it used for?
- F) What are the main components of a computer system unit?
- G) What is the CPU and what does it do?
- H) What is RAM and what is its function?
- I) What is a motherboard and what is its purpose?
- J) What is a hard drive, and what is its function in a computer?

ACTIVITY/PROJECT WORK: -

I. Using Internet (Google search engine) or from newspaper, Magazines – find out the name of various components inside the system unit of computer with pictures and paste in your computer copy.

II. Make a poster on the following topic: -

Imagine that we are going to live with robots in near future. Robots become part of our family and helping us in our daily life. For ex. Doing our homework, cleaning our house etc.

Subject:- Art

Make a Landscape and fill and decorate with stones/pencil scrap/crayon dust. You may colour the stones/pencil scrap with any colour of your choice.